






Comparing widths, lengths and masses

Use the measurements given to answer the questions below

Answer sheet

Toy	Width in cm	Length in cm	Mass in g
 skateboard	14	60	980
 doll	19	32	575
 pencil	1	11	6
 teddy bear	12	21	150
 car	7	13	235

Which toy weighs the least? pencil

How much wider is the skateboard than the teddy bear? 2cm

Which two toys are both shorter than the teddy bear? pencil, car

Which is heavier, the teddy bear or the doll? doll

Name the toys in order of their lengths, from smallest to largest.
pencil, car, teddy bear, doll, skateboard