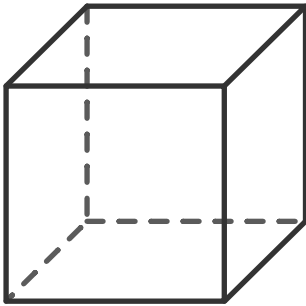



Name: \_\_\_\_\_ Date: \_\_\_\_\_

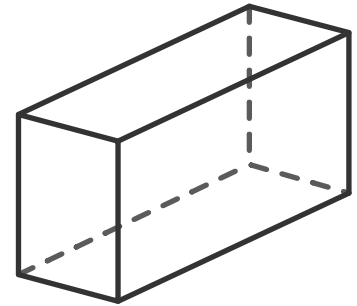
## Properties of 3D shapes



cube



cone



rectangular  
prism

1. Which 3D shape has a flat face that is a circle?  
\_\_\_\_\_
2. Name the 3D shape with six faces that are all equal size  
\_\_\_\_\_
3. How many vertices does the cube have?  
\_\_\_\_\_
4. What 2D shape forms the faces of the cube?  
\_\_\_\_\_
5. How many edges does a rectangular prism have?  
\_\_\_\_\_
6. How many faces does a rectangular prism have?  
\_\_\_\_\_

circle

triangle

square

rectangle

pentagon